



# Desafíos Matemáticos

**Suma.**

$$56 + 2 = \square$$

$$56 + 3 = \square$$

$$53 + 5 = \square$$

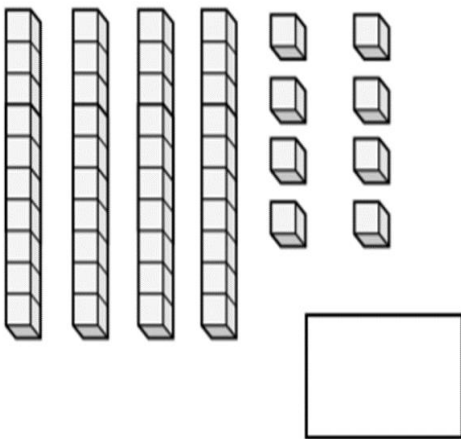
**Resta.**

$$70 - 10 = \square$$

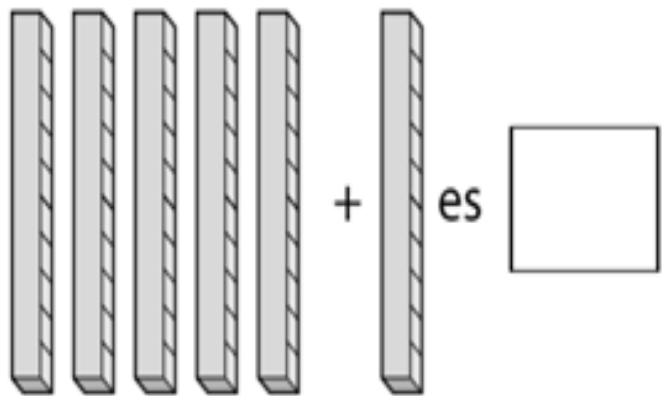
$$67 - 7 = \square$$

$$89 - 4 = \square$$


**¿Cuántos hay?**



**Mira y completa.**



**¿Cuántos hay?**



**¿Cuántos hay?**

